

# AIEEE Examination - 2009

## Physics

### PART – A

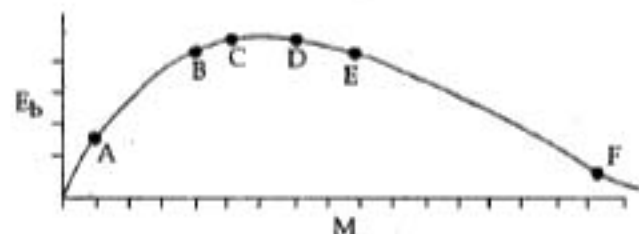
1. This question contains Statement 1 and Statement 2. Of the four choices given after the statements, choose the one that best describes the two statements.
- Statement 1: For a charged particle moving from point P to point Q, the net work done by an electrostatic field on the particle is independent of the path connecting point P to point Q.
- Statement 2: The net work done by a conservative force on an object moving along a closed loop is zero.
- (1) Statement 1 is true, Statement 2 is false.  
(2) Statement 1 is true, Statement 2 is true, Statement 2 is the correct explanation of Statement 1.  
(3) Statement 1 is true, Statement 2 is true, Statement 2 is not the correct explanation of Statement 1.  
(4) Statement 1 is false, Statement 2 is true.

2. The above is a plot of binding energy per nucleon  $E_b$ , against the nuclear mass  $M$ ; A, B, C, D, E, F correspond to different nuclei. Consider four reactions:

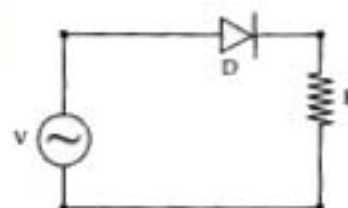


where  $\varepsilon$  is the energy released? In which reactions is  $\varepsilon$  positive?

- (1) (i) and (iv)                                      (2) (i) and (iii)  
(3) (ii) and (iv)                                    (4) (ii) and (iii)



3. A p-n junction (D) shown in the figure can act as a rectifier. An alternating current source (V) is connected in the circuit.



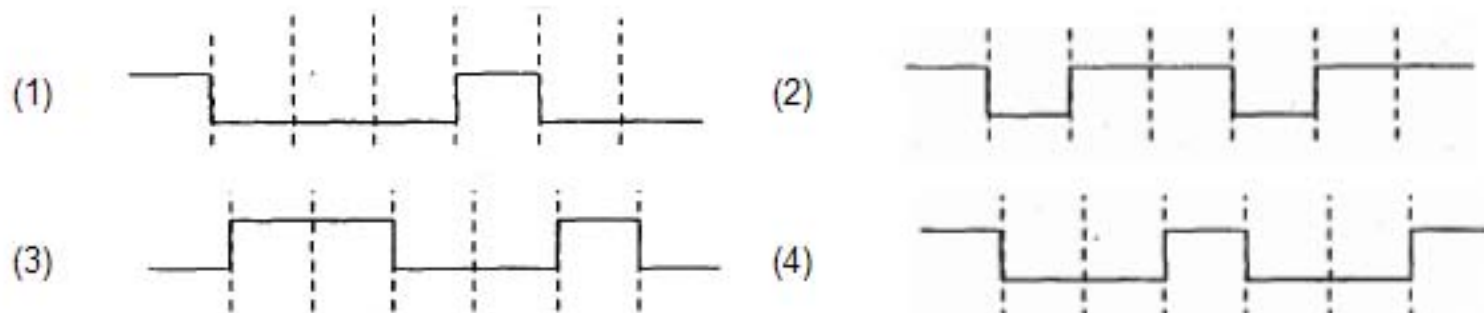
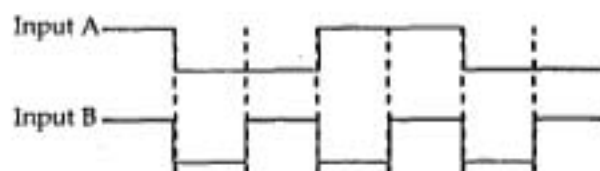
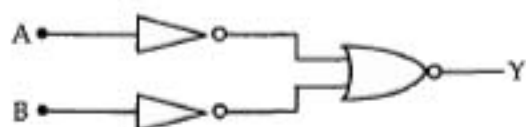
(1)



(2)



4. The logic circuit shown below has the input waveforms 'A' and 'B' as shown. Pick out the correct output waveform.



- \*5. If  $x$ ,  $v$  and  $a$  denote the displacement, the velocity and the acceleration of a particle executing simple harmonic motion of time period  $T$ , then, which of the following does not change with time?

- (1)  $a^2 T^2 + 4\pi^2 v^2$                       (2)  $\frac{aT}{x}$   
 (3)  $aT + 2\pi v$                               (4)  $\frac{aT}{v}$

6. In an optics experiment, with the position of the object fixed, a student varies the position of a convex lens and for each position, the screen is adjusted to get a clear image of the object. A graph between the object distance  $u$  and the image distance  $v$ , from the lens, is plotted using the same scale for the two axes. A straight line passing through the origin and making an angle of  $45^\circ$  with the  $x$ -axis meets the experimental curve at  $P$ . The coordinates of  $P$  will be

- (1)  $(2f, 2f)$                                   (2)  $\left(\frac{f}{2}, \frac{f}{2}\right)$   
 (3)  $(f, f)$                                       (4)  $(4f, 4f)$

- \*7. A thin uniform rod of length  $\ell$  and mass  $m$  is swinging freely about a horizontal axis passing through its end. Its maximum angular speed is  $\omega$ . Its centre of mass rises to a maximum height of

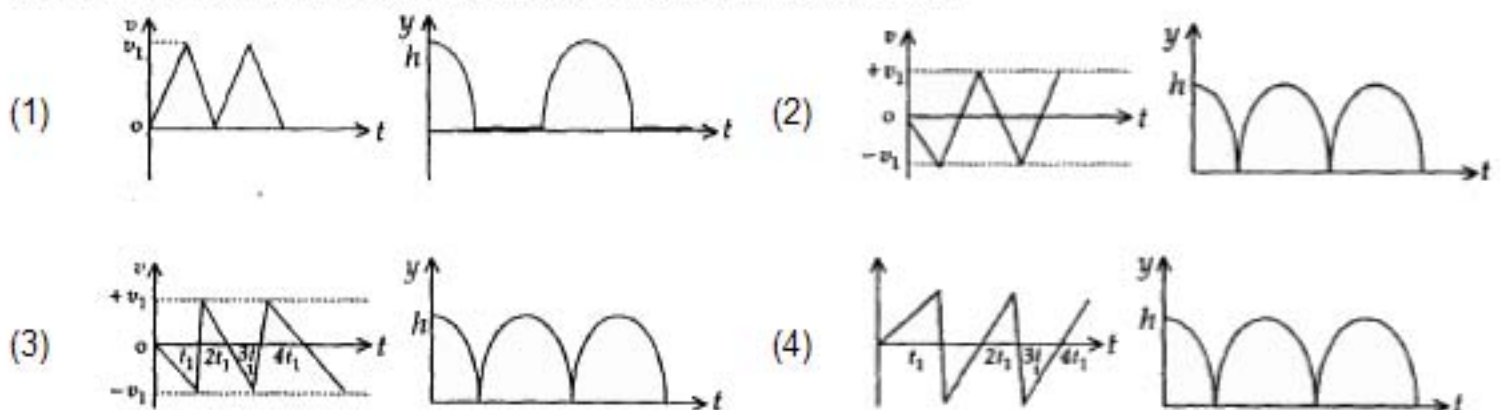
- (1)  $\frac{1}{3} \frac{\ell^2 \omega^2}{g}$                                       (2)  $\frac{1}{6} \frac{\ell \omega}{g}$   
 (3)  $\frac{1}{2} \frac{\ell^2 \omega^2}{g}$                                       (4)  $\frac{1}{6} \frac{\ell^2 \omega^2}{g}$

8. One kg of a diatomic gas is at a pressure of  $8 \times 10^4 \text{ N/m}^2$ . The density of the gas is  $4 \text{ kg/m}^3$ . What is the energy of the gas due to its thermal motion?

- (1)  $3 \times 10^4 \text{ J}$                                       (2)  $5 \times 10^4 \text{ J}$   
 (3)  $6 \times 10^4 \text{ J}$                                       (4)  $7 \times 10^4 \text{ J}$

9. This question contains Statement-1 and Statement-2. Of the four choices given after the statements, choose the one that best describes the two statements.  
 Statement-1: The temperature dependence of resistance is usually given as  $R = R_0(1 + \alpha\Delta t)$ . The resistance of a wire changes from  $100 \Omega$  to  $150 \Omega$  when its temperature is increased from  $27^\circ\text{C}$  to  $227^\circ\text{C}$ . This implies that  $\alpha = 2.5 \times 10^{-3} / ^\circ\text{C}$ .  
 Statement 2:  $R = R_0(1 + \alpha\Delta T)$  is valid only when the change in the temperature  $\Delta T$  is small and  $\Delta R = (R - R_0) \ll R_0$ .
- (1) Statement-1 is true, Statement-2 is false  
 (2) Statement-1 is true, Statement-2 is true; Statement-2 is the correct explanation of Statement-1.  
 (3) Statement-1 is true, Statement-2 is true; Statement-2 is not the correct explanation of Statement-1.  
 (4) Statement-1 is false, Statement-2 is true
10. The transition from the state  $n = 4$  to  $n = 3$  in a hydrogen like atom results in ultraviolet radiation. Infrared radiation will be obtained in the transition from
- (1)  $2 \rightarrow 1$  (2)  $3 \rightarrow 2$   
 (3)  $4 \rightarrow 2$  (4)  $5 \rightarrow 4$
11. Let  $P(r) = \frac{Q}{\pi R^4} r$  be the charge density distribution for a solid sphere of radius  $R$  and total charge  $Q$ . for a point 'p' inside the sphere at distance  $r_1$  from the centre of the sphere, the magnitude of electric field is
- (1) 0 (2)  $\frac{Q}{4\pi\epsilon_0 r_1^2}$   
 (3)  $\frac{Q r_1^2}{4\pi\epsilon_0 R^4}$  (4)  $\frac{Q r_1^2}{3\pi\epsilon_0 R^4}$
12. A mixture of light, consisting of wavelength  $590 \text{ nm}$  and an unknown wavelength, illuminates Young's double slit and gives rise to two overlapping interference patterns on the screen. The central maximum of both lights coincide. Further, it is observed that the third bright fringe of known light coincides with the 4<sup>th</sup> bright fringe of the unknown light. From this data, the wavelength of the unknown light is
- (1)  $393.4 \text{ nm}$  (2)  $885.0 \text{ nm}$   
 (3)  $442.5 \text{ nm}$  (4)  $776.8 \text{ nm}$
13. The magnitude of the magnetic field ( $B$ ) due to loop ABCD at the origin ( $O$ ) is
- (1) zero (2)  $\frac{\mu_0 (b - a)}{24ab}$   
 (3)  $\frac{\mu_0}{4\pi} \left[ \frac{b - a}{ab} \right]$  (4)  $\frac{\mu_0}{4\pi} \left[ 2(b - a) + \frac{\pi}{3}(a + b) \right]$

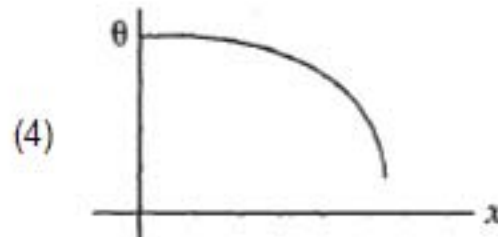
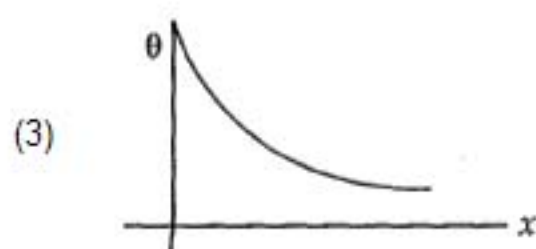
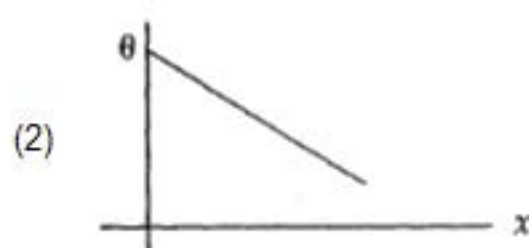
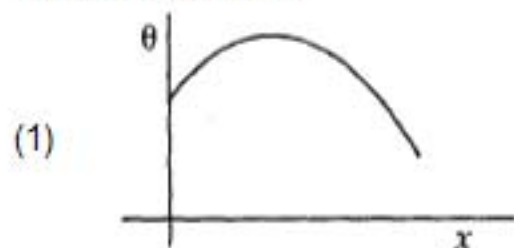
14. Due to the presence of the current  $I_1$  at the origin
- (1) The forces on AB and DC are zero
  - (2) The forces on AD and BC are zero
  - (3) The magnitude of the net force on the loop is given by  $\frac{\mu_0 I_1}{4\pi} \left[ 2(b-a) + \frac{\pi}{3}(a+b) \right]$
  - (4) The magnitude of the net force on the loop is given by  $\frac{\mu_0 I_1}{24ab} (b-a)$
15. Two points P and Q are maintained at the potentials of 10V and -4V respectively. The work done in moving 100 electrons from P to Q is
- (1)  $-19 \times 10^{-17}$  J
  - (2)  $9.60 \times 10^{-17}$  J
  - (3)  $-2.24 \times 10^{-16}$  J
  - (4)  $2.24 \times 10^{-16}$  J
16. A particle has an initial velocity  $3\hat{i} + 4\hat{j}$  and an acceleration of  $0.4\hat{i} + 0.3\hat{j}$ . Its speed after 10 s is
- (1) 10 units
  - (2)  $7\sqrt{2}$  units
  - (3) 7 units
  - (4) 8.5 units
17. The surface of a metal is illuminated with the light of 400 nm. The kinetic energy of the ejected photoelectrons was found to be 1.68 eV. The work function of the metal is ( $hc = 1240$  eV nm)
- (1) 3.09 eV
  - (2) 1.41 eV
  - (3) 151 eV
  - (4) 1.68 eV
18. A motor cycle starts from rest and accelerates along a straight path at  $2 \text{ m/s}^2$ . At the starting point of the motor cycle there is a stationary electric siren. How far has the motor cycle gone when the driver hears the frequency of the siren at 94% of its value when the motor cycle was at rest? (speed of sound =  $330 \text{ ms}^{-1}$ ).
- (1) 49 m
  - (2) 98 m
  - (3) 147 m
  - (4) 196 m
19. Consider a rubber ball freely falling from a height  $h = 4.9$  m onto a horizontal elastic plate. Assume that the duration of collision is negligible and the collision with the plate is totally elastic. Then the velocity as a function of time the height as function of time will be




20. A charge  $Q$  is placed at each of the opposite corners of a square. A charge  $q$  is placed at each of the other two corners. If the net electrical force on  $Q$  is zero, then the  $Q/q$  equals

- (1)  $-2\sqrt{2}$  (2)  $-1$   
 (3)  $1$  (4)  $-\frac{1}{\sqrt{2}}$

21. A long metallic bar is carrying heat from one of its ends to the other end under steady-state. The variation of temperature  $\theta$  along the length  $x$  of the bar from its hot end is best described by which of the following figure.



22. A transparent solid cylindrical rod has a refractive index of  $\frac{2}{\sqrt{3}}$ . It is surrounded by air. A light ray is incident at the mid



point of one end of the rod as shown in the figure.

The incident angle  $\theta$  for which the light ray grazes along the wall of the rod is

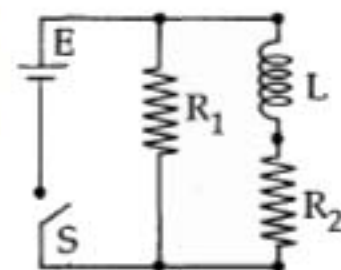
- (1)  $\sin^{-1}\left(\frac{1}{2}\right)$  (2)  $\sin^{-1}\left(\frac{\sqrt{3}}{2}\right)$   
 (3)  $\sin^{-1}\left(\frac{2}{\sqrt{3}}\right)$  (4)  $\sin^{-1}\left(\frac{1}{\sqrt{3}}\right)$

23. Three sound waves of equal amplitudes have frequencies  $(\nu - 1)$ ,  $\nu$ ,  $(\nu + 1)$ . They *superpose* to give beats. The number of beats produced per second will be

- (1) 4 (2) 3  
 (3) 2 (4) 1

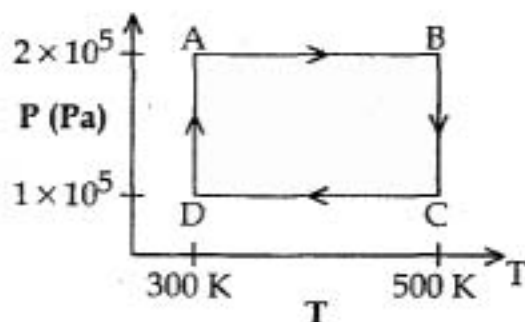
24. The height at which the acceleration due to gravity becomes  $\frac{g}{9}$  (where  $g$  = the acceleration due to gravity on the surface of the earth) in terms of  $R$ , the radius of the earth is
- (1)  $2R$  (2)  $\frac{R}{\sqrt{2}}$   
 (3)  $\frac{R}{2}$  (4)  $\sqrt{2}R$

25. An inductor of inductance  $L = 400$  mH and resistors of resistances  $R_1 = 2\Omega$  and  $R_2 = 2\Omega$  are connected to a battery of emf  $12V$  as shown in the figure. The internal resistance of the battery is negligible. The switch  $S$  is closed at  $t = 0$ . The potential drop across  $L$  as a function of time is



- (1)  $6e^{-5t}V$  (2)  $\frac{12}{t}e^{-3t}V$   
 (3)  $6(1 - e^{-t/0.2})V$  (4)  $12e^{-5t}V$
26. In an experiment the angles are required to be measured using an instrument. 29 divisions of the main scale exactly coincide with the 30 divisions of the vernier scale. If the smallest division of the main scale is half-a-degree( $=0.5^\circ$ ), then the least count of the instrument is
- (1) one minute (2) half minute  
 (3) one degree (4) half degree
27. Two wires are made of the same material and have the same volume. However wire 1 has cross-sectional area  $A$  and wire-2 has cross-sectional area  $3A$ . If the length of wire 1 increases by  $\Delta x$  on applying force  $F$ , how much force is needed to stretch wire 2 by the same amount?
- (1)  $F$  (2)  $4F$   
 (3)  $6F$  (4)  $9F$

**Directions:** Question numbers 28, 29 and 30 are based on the following paragraph.  
 Two moles of helium gas are taken over the cycle ABCDA, as shown in the  $P - T$  diagram.



28. Assuming the gas to be ideal the work done on the gas in taking it from A to B is
- (1)  $200 R$  (2)  $300 R$   
 (3)  $400 R$  (4)  $500 R$

29. The work done on the gas in taking it from D to A is  
 (1) - 414 R (2) + 414 R  
 (3) - 690 R (4) + 690 R
30. The net work done on the gas in the cycle ABCDA is  
 (1) Zero (2) 276 R  
 (3) 1076 R (4) 1904 R

## CHEMISTRY

### PART – B

31. Knowing that the Chemistry of lanthanoids (Ln) is dominated by its +3 oxidation state, which of the following statements is incorrect ?  
 (1) Because of the large size of the Ln (III) ions the bonding in its compounds is predominantly ionic in character.  
 (2) The ionic sizes of Ln (III) decrease in general with increasing atomic number.  
 (3) Ln (III) compounds are generally colourless.  
 (4) Ln (III) hydroxides are mainly basic in character.
32. The alkene that exhibits geometrical isomerism is :  
 (1) propene (2) 2-methyl propene  
 (3) 2-butene (4) 2-methyl -2- butene
33. In which of the following arrangements, the sequence is not strictly according to the property written against it ?  
 (1)  $\text{CO}_2 < \text{SiO}_2 < \text{SnO}_2 < \text{PbO}_2$  : increasing oxidising power  
 (2)  $\text{HF} < \text{HCl} < \text{HBr} < \text{HI}$  : increasing acid strength  
 (3)  $\text{NH}_3 < \text{PH}_3 < \text{AsH}_3 < \text{SbH}_3$  : increasing basic strength  
 (4)  $\text{B} < \text{C} < \text{O} < \text{N}$  : increasing first ionization enthalpy.
34. Arrange the carbanions,  $(\text{CH}_3)_3 \bar{\text{C}}$ ,  $\bar{\text{C}}\text{Cl}_3$ ,  $(\text{CH}_3)_2 \bar{\text{C}}\text{H}$ ,  $\text{C}_6\text{H}_5 \bar{\text{C}}\text{H}_2$ , in order of their decreasing stability :  
 (1)  $\text{C}_6\text{H}_5 \bar{\text{C}}\text{H}_2 > \bar{\text{C}}\text{Cl}_3 > (\text{CH}_3)_3 \bar{\text{C}} > (\text{CH}_3)_2 \bar{\text{C}}\text{H}$  (2)  $(\text{CH}_3)_2 \bar{\text{C}}\text{H} > \bar{\text{C}}\text{Cl}_3 > \text{C}_6\text{H}_5 \bar{\text{C}}\text{H}_2 > (\text{CH}_3)_3 \bar{\text{C}}$   
 (3)  $\bar{\text{C}}\text{Cl}_3 > \text{C}_6\text{H}_5 \bar{\text{C}}\text{H}_2 > (\text{CH}_3)_2 \bar{\text{C}}\text{H} > (\text{CH}_3)_3 \bar{\text{C}}$  (4)  $(\text{CH}_3)_3 \bar{\text{C}} > (\text{CH}_3)_2 \bar{\text{C}}\text{H} > \text{C}_6\text{H}_5 \bar{\text{C}}\text{H}_2 > \bar{\text{C}}\text{Cl}_3$
35. A liquid was mixed with ethanol and a drop of concentrated  $\text{H}_2\text{SO}_4$  was added. A compound with a fruity smell was formed. The liquid was :  
 (1)  $\text{CH}_3\text{OH}$  (2)  $\text{HCHO}$   
 (3)  $\text{CH}_3\text{COCH}_3$  (4)  $\text{CH}_3\text{COOH}$

36. In an atom, an electron is moving with a speed of 600m/s with an accuracy of 0.005%. Certainty with which the position of the electron can be located is ( $h = 6.6 \times 10^{-34} \text{ kg m}^2 \text{ s}^{-1}$ , mass of electron,  $m_e = 9.1 \times 10^{-31} \text{ kg}$ )
- (1)  $1.52 \times 10^{-4} \text{ m}$  (2)  $5.10 \times 10^{-3} \text{ m}$   
 (3)  $1.92 \times 10^{-3} \text{ m}$  (4)  $3.84 \times 10^{-3} \text{ m}$
37. The major product obtained on interaction of phenol with sodium hydroxide and carbon dioxide is :
- (1) benzoic acid (2) salicylaldehyde  
 (3) salicylic acid (4) phthalic acid
38. Which of the following statements is incorrect regarding physisorptions ?
- (1) It occurs because of vander Waal's forces.  
 (2) More easily liquefiable gases are adsorbed readily.  
 (3) Under high pressure it results into multi molecular layer on adsorbent surface.  
 (4) Enthalpy of adsorption ( $\Delta H_{\text{adsorption}}$ ) is low and positive.
39. Which of the following on heating with aqueous KOH, produces acetaldehyde ?
- (1)  $\text{CH}_3\text{COCl}$  (2)  $\text{CH}_3\text{CH}_2\text{Cl}$   
 (3)  $\text{CH}_2\text{ClCH}_2\text{Cl}$  (4)  $\text{CH}_3\text{CHCl}_2$
40. Two liquids X and Y form an ideal solution. At 300K, vapour pressure of the solution containing 1 mol of X and 3 mol of Y is 550 mm Hg. At the same temperature, if 1 mol of Y is further added to this solution, vapour pressure of the solution increases by 10 mm Hg. Vapour pressure (in mmHg) of X and Y in their pure states will be, respectively :
- (1) 200 and 300 (2) 300 and 400  
 (3) 400 and 600 (4) 500 and 600
41. The half life period of a first order chemical reaction is 6.93 minutes. The time required for the completion of 99% of the chemical reaction will be ( $\log 2 = 0.301$ ) :
- (1) 230.3 minutes (2) 23.03 minutes  
 (3) 46.06 minutes (4) 460.6 minutes
42. In a fuel cell methanol is used as fuel and oxygen gas is used as an oxidizer. The reaction is  $\text{CH}_3\text{OH}(\ell) + \frac{3}{2} \text{O}_2(\text{g}) \rightarrow \text{CO}_2(\text{g}) + 2\text{H}_2\text{O}(\ell)$  At 298K standard Gibb's energies of formation for  $\text{CH}_3\text{OH}(\ell)$ ,  $\text{H}_2\text{O}(\ell)$  and  $\text{CO}_2(\text{g})$  are -166.2, -237.2 and -394.4  $\text{kJ mol}^{-1}$  respectively. If standard enthalpy of combustion of methanol is -726  $\text{kJ mol}^{-1}$ , efficiency of the fuel cell will be
- (1) 80 % (2) 87%  
 (3) 90% (4) 97%
43. Given :  $E^\circ_{\text{Fe}^{3+}/\text{Fe}} = -0.036\text{V}$ ,  $E^\circ_{\text{Fe}^{2+}/\text{Fe}} = -0.439\text{V}$ . The value of standard electrode potential for the change,  $\text{Fe}^{3+}_{(\text{aq})} + \text{e}^- \rightarrow \text{Fe}^{2+}(\text{aq})$  will be :
- (1) -0.072 V (2) 0.385 V  
 (3) 0.770 V (4) -0.270



44. Solid  $\text{Ba}(\text{NO}_3)_2$  is gradually dissolved in a  $1.0 \times 10^{-4} \text{ M}$   $\text{Na}_2\text{CO}_3$  solution. At what concentration of  $\text{Ba}^{2+}$  will a precipitate begin to form? ( $K_{sp}$  for  $\text{BaCO}_3 = 5.1 \times 10^{-9}$ ).
- (1)  $4.1 \times 10^{-5} \text{ M}$  (2)  $5.1 \times 10^{-5} \text{ M}$   
 (3)  $8.1 \times 10^{-5} \text{ M}$  (4)  $8.1 \times 10^{-7} \text{ M}$
45. Copper crystallizes in fcc with a unit cell length of 361 pm. What is the radius of copper atom?
- (1) 108 pm (2) 127 pm  
 (3) 157 pm (4) 181 pm
46. Which of the following has an optical isomer?
- (1)  $[\text{Co}(\text{NH}_3)_3\text{Cl}]^+$  (2)  $[\text{Co}(\text{en})(\text{NH}_3)_2]^{2+}$   
 (3)  $[\text{Co}(\text{H}_2\text{O})_4(\text{en})]^{3+}$  (4)  $[\text{Co}(\text{en})_2(\text{NH}_3)_2]^{3+}$
47. Using MO theory predict which of the following species has the shortest bond length?
- (1)  $\text{O}_2^{2+}$  (2)  $\text{O}_2^+$   
 (3)  $\text{O}_2^-$  (4)  $\text{O}_2^{2-}$
48. On the basis of the following thermochemical data : ( $\Delta_f G^\circ_{(\text{aq})} = 0$ )
- $\text{H}_2\text{O}(\ell) \rightarrow \text{H}^+(\text{aq}) + \text{OH}^-(\text{aq}); \Delta H = 57.32 \text{ kJ}$   
 $\text{H}_2(\text{g}) + \frac{1}{2} \text{O}_2(\text{g}) \rightarrow \text{H}_2\text{O}(\ell); \Delta H = -286.20 \text{ kJ}$
- The value of enthalpy of formation of  $\text{OH}^-$  ion at  $25^\circ \text{C}$  is :
- (1)  $-22.88 \text{ kJ}$  (2)  $-228.88 \text{ kJ}$   
 (3)  $+228.88 \text{ kJ}$  (4)  $-343.52 \text{ kJ}$
49. Which one of the following reactions of Xenon compounds is not feasible?
- (1)  $\text{XeO}_3 + 6\text{HF} \rightarrow \text{XeF}_6 + 3\text{H}_2\text{O}$   
 (2)  $3\text{XeF}_4 + 6\text{H}_2\text{O} \rightarrow 2\text{Xe} + \text{XeO}_3 + 12\text{HF} + 1.5\text{O}_2$   
 (3)  $2\text{XeF}_2 + 2\text{H}_2\text{O} \rightarrow 2\text{Xe} + 4\text{HF} + \text{O}_2$   
 (4)  $\text{XeF}_6 + \text{RbF} \rightarrow \text{Rb}(\text{XeF}_7)$
50. In context with the transition elements, which of the following statements is incorrect?
- (1) In addition to the normal oxidation states, the zero oxidation state is also shown by these elements in complexes.  
 (2) In the highest oxidation states, the transition metal show basic character and form cationic complexes.  
 (3) In the highest oxidation states of the first five transition elements (Sc to Mn), all the 4s and 3d electrons are used for bonding.  
 (4) Once the  $d^5$  configuration is exceeded, the tendency to involve all the 3d electrons in bonding decreases.

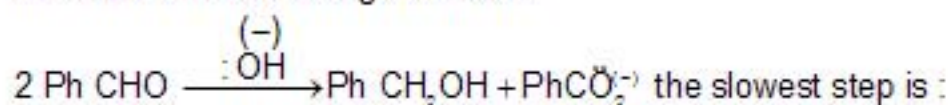
51. The number of stereoisomers possible for a compound of the molecular formula  $\text{CH}_3 - \text{CH} = \text{CH} - \text{CH}(\text{OH}) - \text{Me}$  is :
- (1) 3 (2) 2  
(3) 4 (4) 6
52. The IUPAC name of neopentane is
- (1) 2-methylbutane (2) 2, 2-dimethylpropane  
(3) 2-methylpropane (4) 2,2-dimethylbutane
53. A binary liquid solution is prepared by mixing n-heptane and ethanol. Which one of the following statements is correct regarding the behaviour of the solution ?
- (1) The solution formed is an ideal solution  
(2) The solution is non-ideal, showing +ve deviation from Raoult's law.  
(3) The solution is non-ideal, showing -ve deviation from Raoult's law.  
(4) n-heptane shows +ve deviation while ethanol shows -ve deviation from Raoult's law.
54. The set representing the correct order of ionic radius is :
- (1)  $\text{Li}^+ > \text{Be}^{2+} > \text{Na}^+ > \text{Mg}^{2+}$  (2)  $\text{Na}^+ > \text{Li}^+ > \text{Mg}^{2+} > \text{Be}^{2+}$   
(3)  $\text{Li}^+ > \text{Na}^+ > \text{Mg}^{2+} > \text{Be}^{2+}$  (4)  $\text{Mg}^{2+} > \text{Be}^{2+} > \text{Li}^+ > \text{Na}^+$
55. The bond dissociation energy of B - F in  $\text{BF}_3$  is  $646 \text{ kJ mol}^{-1}$  whereas that of C-F in  $\text{CF}_4$  is  $515 \text{ kJ mol}^{-1}$ . The correct reason for higher B-F bond dissociation energy as compared to that of C-F is :
- (1) smaller size of B-atom as compared to that of C-atom  
(2) stronger  $\sigma$  bond between B and F in  $\text{BF}_3$  as compared to that between C and F in  $\text{CF}_4$   
(3) significant  $p\pi - p\pi$  interaction between B and F in  $\text{BF}_3$  whereas there is no possibility of such interaction between C and F in  $\text{CF}_4$ .  
(4) lower degree of  $p\pi - p\pi$  interaction between B and F in  $\text{BF}_3$  than that between C and F in  $\text{CF}_4$ .
56. Follow the periodic trends  
The two functional groups present in a typical carbohydrate are :
- (1) -OH and -COOH (2) -CHO and -COOH  
(3)  $> \text{C} = \text{O}$  and -OH (4) -OH and -CHO
57. Calculate the wavelength (in nanometer) associated with a proton moving at  $1.0 \times 10^3 \text{ ms}^{-1}$   
(Mass of proton =  $1.67 \times 10^{-27} \text{ kg}$  and  $h = 6.63 \times 10^{-34} \text{ Js}$ ) :
- (1) 0.032 nm (2) 0.40 nm  
(3) 2.5 nm (4) 14.0 nm
58. Hydride transfer is the slowest step.  
Which of the following pairs represents linkage isomers ?
- (1)  $[\text{Cu}(\text{NH}_3)_4][\text{PtCl}_4]$  and  $[\text{Pt}(\text{NH}_3)_4][\text{CuCl}_4]$   
(2)  $[\text{Pd}(\text{PPh}_3)_2(\text{NCS})_2]$  and  $[\text{Pd}(\text{PPh}_3)_2(\text{SCN})_2]$   
(3)  $[\text{CO}(\text{NH}_3)_5\text{NO}_3]\text{SO}_4$  and  $[\text{CO}(\text{NH}_3)_5\text{SO}_4]\text{NO}_3$   
(4)  $[\text{PtCl}_2(\text{NH}_3)_4]\text{Br}_2$  and  $[\text{PtBr}_2(\text{NH}_3)_4]\text{Cl}_2$

59. Buna-N synthetic rubber is a copolymer of :

- (1)  $\text{H}_2\text{C} = \text{CH} - \overset{\text{Cl}}{\underset{|}{\text{C}}} = \text{CH}_2$  and  $\text{H}_2\text{C} = \text{CH} - \text{CH} = \text{CH}_2$   
(2)  $\text{H}_2\text{C} = \text{CH} - \text{CH} = \text{CH}_2$  and  $\text{H}_2\text{C} = \text{CH} - \text{CH} = \text{CH}_2$   
(3)  $\text{H}_2\text{C} = \text{CH} - \text{CN}$  and  $\text{H}_2\text{C} = \text{CH} - \text{CH} = \text{CH}_2$   
(4)  $\text{H}_2\text{C} = \text{CH} - \text{CN}$  and  $\text{H}_2\text{C} = \text{CH} - \overset{\text{CH}_3}{\underset{|}{\text{C}}} = \text{CH}_2$

60. option itself is the reason

In Cannizzaro reaction given below



- (1) the attack of  $:\overset{(-)}{\text{OH}}$  at the carbonyl group  
(2) the transfer of hydride to the carbonyl group  
(3) the abstraction of proton from the carboxylic group  
(4) the deprotonation of  $\text{Ph CH}_2\text{OH}$

## Mathematics

---

### PART – C

61. If the roots of the equation  $bx^2 + cx + a = 0$  be imaginary, then for all real values of  $x$ , the expression  $3b^2x^2 + 6bcx + 2c^2$  is
- (1) greater than  $4ab$  (2) less than  $4ab$   
(3) greater than  $-4ab$  (4) less than  $-4ab$
62. If the mean deviation of number  $1, 1 + d, 1 + 2d, \dots, 1 + 100d$  from their mean is 255, then the  $d$  is equal to
- (1) 10.0 (2) 20.0  
(3) 10.1 (4) 20.2
63. If  $A, B$  and  $C$  are three sets such that  $A \cap B = A \cap C$  and  $A \cup B = A \cup C$ , then
- (1)  $A = B$  (2)  $A = C$   
(3)  $B = C$  (4)  $A \cap B = \phi$
64. The remainder left out when  $8^{2n} - (62)^{2n+1}$  is divided by 9 is
- (1) 0 (2) 2  
(3) 7 (4) 8

65. Let A and B denote the statements  
 A:  $\cos \alpha + \cos \beta + \cos \gamma = 0$   
 B:  $\sin \alpha + \sin \beta + \sin \gamma = 0$   
 If  $\cos(\beta - \gamma) + \cos(\gamma - \alpha) + \cos(\alpha - \beta) = -\frac{3}{2}$ , then  
 (1) A is true and B is false (2) A is false and B is true  
 (3) both A and B are true (4) both A and B are false
66. If  $\vec{u}, \vec{v}, \vec{w}$  are non-coplanar vectors and p, q are real numbers, then the equality  
 $[3\vec{u} \ p\vec{v} \ p\vec{w}] - [p\vec{v} \ \vec{w} \ q\vec{u}] - [2\vec{w} \ q\vec{v} \ q\vec{u}] = 0$  holds for  
 (1) exactly one value of (p, q) (2) exactly two values of (p, q)  
 (3) more than two but not all values of (p, q) (4) all values of (p, q)
67. The lines  $p(p^2 + 1)x - y + q = 0$  and  $(p^2 + 1)^2 x + (p^2 + 1)y + 2q = 0$  are perpendicular to a common line for  
 (1) no value of p (2) exactly one value of p  
 (3) exactly two values of p (4) more than two values of p
68. For real x, let  $f(x) = x^3 + 5x + 1$ , then  
 (1) f is one-one but not onto R (2) f is onto R but not one-one  
 (3) f is one-one and onto R (4) f is neither one-one nor onto R
69. Let the line  $\frac{x-2}{3} = \frac{y-1}{-5} = \frac{z+2}{2}$  lies in the plane  $x + 3y - \alpha z + \beta = 0$ . Then  $(\alpha, \beta)$  equals  
 (1) (6, -17) (2) (-6, 7)  
 (3) (5, -15) (4) (-5, 15)
70. From 6 different novels and 3 different dictionaries, 4 novels and 1 dictionary are to be selected and arranged in a row on the shelf so that the dictionary is always in the middle. Then the number of such arrangements is  
 (1) less than 500 (2) at least 500 but less than 750  
 (3) at least 750 but less than 1000 (4) at least 1000
71.  $\int_0^{\pi} [\cot x] dx$ ,  $[\bullet]$  denotes the greatest integer function, is equal to  
 (1)  $\frac{\pi}{2}$  (2) 1  
 (3) -1 (4)  $-\frac{\pi}{2}$
72. If P and Q are the points of intersection of the circles  $x^2 + y^2 + 3x + 7y + 2p - 5 = 0$  and  $x^2 + y^2 + 2x + 2y - p^2 = 0$ , then there is a circle passing through P, Q and (1, 1) for  
 (1) all values of p (2) all except one value of p  
 (3) all except two values of p (4) exactly one value of p

73. Three distinct points A, B and C are given in the 2 – dimensional coordinate plane such that the ratio of the distance of any one of them from the point (1, 0) to the distance from the point (-1, 0) is equal to  $\frac{1}{3}$ . Then the circumcentre of the triangle ABC is at the point
- (1) (0, 0) (2)  $\left(\frac{5}{4}, 0\right)$   
 (3)  $\left(\frac{5}{2}, 0\right)$  (4)  $\left(\frac{5}{3}, 0\right)$
74. If  $\left|Z - \frac{4}{Z}\right| = 2$ , then the maximum value of  $|Z|$  is equal to
- (1)  $\sqrt{3} + 1$  (2)  $\sqrt{5} + 1$   
 (3) 2 (4)  $2 + \sqrt{2}$
75. The sum to the infinity of the series  $1 + \frac{2}{3} + \frac{6}{3^2} + \frac{10}{3^3} + \frac{14}{3^4} + \dots$  is
- (1) 2 (2) 3  
 (3) 4 (4) 6
76. The projections of a vector on the three coordinate axis are 6, -3, 2 respectively. The direction cosines of the vector are
- (1) 6, -3, 2 (2)  $\frac{6}{5}, -\frac{3}{5}, \frac{2}{5}$   
 (3)  $\frac{6}{7}, -\frac{3}{7}, \frac{2}{7}$  (4)  $-\frac{6}{7}, -\frac{3}{7}, \frac{2}{7}$
77. In a binomial distribution  $B\left(n, p = \frac{1}{4}\right)$ , if the probability of at least one success is greater than or equal to  $\frac{9}{10}$ , then n is greater than
- (1)  $\frac{1}{\log_{10} 4 - \log_{10} 3}$  (2)  $\frac{1}{\log_{10} 4 + \log_{10} 3}$   
 (3)  $\frac{9}{\log_{10} 4 - \log_{10} 3}$  (4)  $\frac{4}{\log_{10} 4 - \log_{10} 3}$
78. The ellipse  $x^2 + 4y^2 = 4$  is inscribed in a rectangle aligned with the coordinate axes, which in turn is inscribed in another ellipse that passes through the point (4, 0). Then the equation of the ellipse is
- (1)  $x^2 + 16y^2 = 16$  (2)  $x^2 + 12y^2 = 16$   
 (3)  $4x^2 + 48y^2 = 48$  (4)  $4x^2 + 64y^2 = 48$
79. Let a, b, c be such that  $b(a+c) \neq 0$ . If  $\begin{vmatrix} a & a+1 & a-1 \\ -b & b+1 & b-1 \\ c & c-1 & c+1 \end{vmatrix} + \begin{vmatrix} a+1 & b+1 & c-1 \\ a-1 & b-1 & c+1 \\ (-1)^{n+2} a & (-1)^{n+1} b & (-1)^n c \end{vmatrix} = 0$ , then the value of 'n' is
- (1) zero (2) any even integer  
 (3) any odd integer (4) any integer

80. One ticket is selected at random from 50 tickets numbered 00, 01, 02, ..., 49. Then the probability that the sum of the digits on the selected ticket is 8, given that the product of these digits is zero, equals
- (1)  $\frac{1}{14}$  (2)  $\frac{1}{7}$   
 (3)  $\frac{5}{14}$  (4)  $\frac{1}{50}$
81. The differential equation which represents the family of curves  $y = c_1 e^{c_2 x}$ , where  $c_1$  and  $c_2$  are arbitrary constants is
- (1)  $y' = y^2$  (2)  $y'' = y'y$   
 (3)  $yy'' = y'$  (4)  $yy'' = (y')^2$
82. Let  $y$  be an implicit function of  $x$  defined by  $x^{2x} - 2x^x \cot y - 1 = 0$ . Then  $y'(1)$  equals
- (1)  $-1$  (2)  $1$   
 (3)  $\log 2$  (4)  $-\log 2$
83. The area of the region bounded by the parabola  $(y-2)^2 = x-1$ , the tangent to the parabola at the point (2, 3) and the x-axis is
- (1) 3 (2) 6  
 (3) 9 (4) 12
84. Given  $P(x) = x^4 + ax^3 + bx^2 + cx + d$  such that  $x = 0$  is the only real root of  $P'(x) = 0$ . If  $P(-1) < P(1)$ , then in the interval  $[-1, 1]$
- (1)  $P(-1)$  is the minimum and  $P(1)$  is the maximum of  $P$   
 (2)  $P(-1)$  is not minimum but  $P(1)$  is the maximum of  $P$   
 (3)  $P(-1)$  is the minimum and  $P(1)$  is not the maximum of  $P$   
 (4) neither  $P(-1)$  is the minimum nor  $P(1)$  is the maximum of  $P$
85. Let  $f(x) = (x+1)^2 - 1, x \geq -1$   
 Statement-1 : The set  $\{x : f(x) = f^{-1}(x)\} = \{0, -1\}$   
 Statement-2 :  $f$  is a bijection.
- (1) Statement-1 is true, Statement-2 is true; Statement-2 is a correct explanation for Statement-1  
 (2) Statement-1 is true, Statement-2 is true; Statement-2 is **not** a correct explanation for Statement-1  
 (3) Statement-1 is true, Statement-2 is false  
 (4) Statement-1 is false, Statement-2 is true
86. The shortest distance between the line  $y - x = 1$  and the curve  $x = y^2$  is
- (1)  $\frac{3\sqrt{2}}{8}$  (2)  $\frac{2\sqrt{3}}{8}$   
 (3)  $\frac{3\sqrt{2}}{5}$  (4)  $\frac{\sqrt{3}}{4}$

87. Let A be a  $2 \times 2$  matrix  
 Statement-1 :  $\text{adj}(\text{adj } A) = A$   
 Statement-2 :  $|\text{adj } A| = |A|$   
 (1) Statement-1 is true, Statement-2 is true; Statement-2 is a correct explanation for Statement-1  
 (2) Statement-1 is true, Statement-2 is true; Statement-2 is **not** a correct explanation for Statement-1  
 (3) Statement-1 is true, Statement-2 is false  
 (4) Statement-1 is false, Statement-2 is true
88. Statement-1 :  $\sim(p \leftrightarrow \sim q)$  is equivalent to  $p \leftrightarrow q$ .  
 Statement-2 :  $\sim(p \leftrightarrow \sim q)$  is a tautology.  
 (1) Statement-1 is true, Statement-2 is true; Statement-2 is a correct explanation for Statement-1  
 (2) Statement-1 is true, Statement-2 is true; Statement-2 is **not** a correct explanation for Statement-1  
 (3) Statement-1 is true, Statement-2 is false  
 (4) Statement-1 is false, Statement-2 is true
89. Let  $f(x) = x|x|$  and  $g(x) = \sin x$ .  
 Statement-1 :  $f$  is differentiable at  $x = 0$  and its derivative is continuous at that point.  
 Statement-2 :  $f$  is twice differentiable at  $x = 0$ .  
 (1) Statement-1 is true, Statement-2 is true; Statement-2 is a correct explanation for Statement-1  
 (2) Statement-1 is true, Statement-2 is true; Statement-2 is **not** a correct explanation for Statement-1  
 (3) Statement-1 is true, Statement-2 is false  
 (4) Statement-1 is false, Statement-2 is true
90. Statement-1 : The variance of first  $n$  even natural numbers is  $\frac{n^2 - 1}{4}$   
 Statement-2 : The sum of first  $n$  natural numbers is  $\frac{n(n+1)}{2}$  and the sum of squares of first  $n$  natural numbers is  $\frac{n(n+1)(2n+1)}{6}$   
 (1) Statement-1 is true, Statement-2 is true; Statement-2 is a correct explanation for Statement-1  
 (2) Statement-1 is true, Statement-2 is true; Statement-2 is **not** a correct explanation for Statement-1  
 (3) Statement-1 is true, Statement-2 is false  
 (4) Statement-1 is false, Statement-2 is true



- iPractice.in is an online exam preparation tool.
- It helps you to prepare smarter and score higher marks in exams.
- Practice online and save time.
- With instant feedback.
- and in-depth analysis of your performance.